

Sada diagramů č. 19c - Zadání 31. 3. 2016 / Kontrola 7. 4. 2016




Diagram 1 – Bílý na tahu dá mat 1. tahem




Diagram 2 – Černý na tahu dá mat 1. tahem

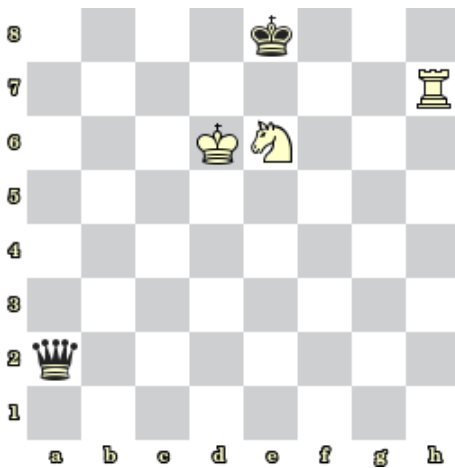


Diagram 3 – Bílý na tahu dá mat 1. tahem



Diagram 4 – Bílý na tahu dá mat 1. tahem

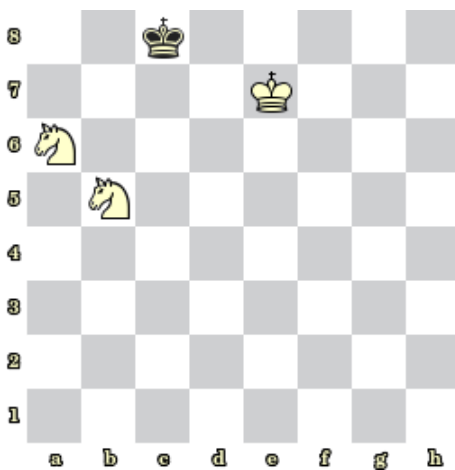


Diagram 5 – Bílý na tahu dá mat 1. tahem





Diagram 6 – Bílý na tahu dá mat 1. tahem



Bonusové diagramy

