

Sada diagramů č. 24c - Zadání 5. 5. 2016 / Kontrola 12. 5. 2016




Diagram 1 – Bílý na tahu dá mat 1. tahem




Diagram 2 – Bílý na tahu dá mat 1. tahem



Diagram 3 – Černý na tahu dá mat 1. tahem

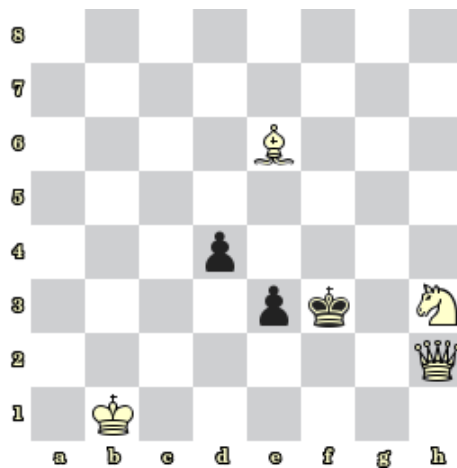


Diagram 4 – Bílý na tahu dá mat 1. tahem




Diagram 5 – Bílý na tahu dá mat 1. tahem




Diagram 6 – Bílý na tahu dá mat 1. tahem




Diagram 7 – Bílý na tahu dá mat 2. tahem



Diagram 8 – Bílý na tahu dá mat 2. tahem

Bonusové diagramy




Diagram 9 – Bílý na tahu dá mat 2. tahem



Diagram 10 – Bílý na tahu dá mat 3. tahem