

Sada diagramů č. 9c - Zadání 3. 12. 2015 / Kontrola 10. 12. 2015




Diagram 1 – Bílý na tahu dá mat 1. tahem

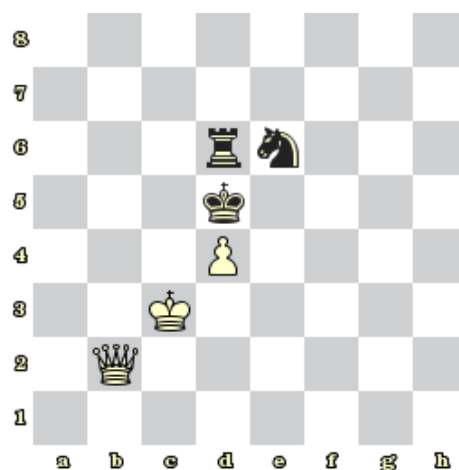


Diagram 2- Bílý na tahu dá mat 1. tahem




Diagram 3 - Bílý na tahu dá mat 1. tahem




Diagram 4 – Černý na tahu dá mat 1. tahem



Diagram 5 – Bílý na tahu dá mat 1. tahem

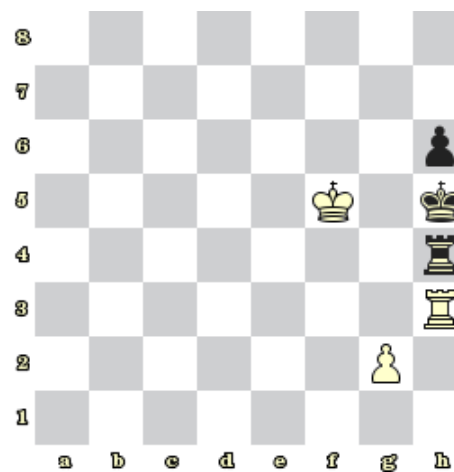


Diagram 6 – Bílý na tahu dá mat 1. tahem




Diagram 7 - Bílý na tahu dá mat 1. tahem



Diagram 8 – Bílý na tahu dá mat 1. tahem

Bonusové diagramy




Diagram 9 – Bílý na tahu dá mat 2. tahem




Diagram 10 – Bílý na tahu dá mat 2. tahem