




Sada diagramů č. 10b – Zadání 8. 12. 2016 / Kontrola 15. 12. 2016



1) BNT – Najděte matovou kombinaci (994)



2) ČNT – Najděte matovou kombinaci (995)




3) BNT – Najděte matovou kombinaci (996)




4) ČNT – Najděte matovou kombinaci (997)




5) BNT – Najděte matovou kombinaci (1000)



6) ČNT – Najděte matovou kombinaci (1007)




7) BNT – Najděte matovou kombinaci (1008)




8) BNT – Najděte matovou kombinaci (1010)

Bonusové diagramy



9) BNT – Najděte matovou kombinaci (1011)



10) BNT – Najděte matovou kombinaci (1012)