




Sada diagramů č. 16a - Zadání 9. 2. 2017 / Kontrola 16. 2. 2017



1) Bílý na tahu dá mat 1. tahem (1141)




2) Bílý na tahu dá mat 1. tahem (1142)



3) Bílý na tahu dá mat 1. tahem (1143)



4) Bílý na tahu dá mat 1. tahem (1144)




5) Bílý na tahu dá mat 1. tahem (1145)



6) Bílý na tahu dá mat 1. tahem (1146)




7) Černý na tahu dá mat 1. tahem (1147)




8) Bílý na tahu dá mat 1. tahem (1148)

Bonusové diagramy



9) Černý na tahu dá mat 2. tahem (1149)



10) Bílý na tahu dá mat 2. tahem (1154)