



Sada diagramů č. 16c - Zadání 9. 2. 2017 / Kontrola 16. 2. 2017



1) ČNT – Najděte matovou kombinaci (1152)



2) BNT – najděte matovou kombinaci (1156)




3) BNT – najděte matovou kombinaci (1157)




4) BNT – Najděte matovou kombinaci (1158)




5) BNT – Najděte matovou kombinaci (1159)



6) Bílý na tahu vyhraje (1160)

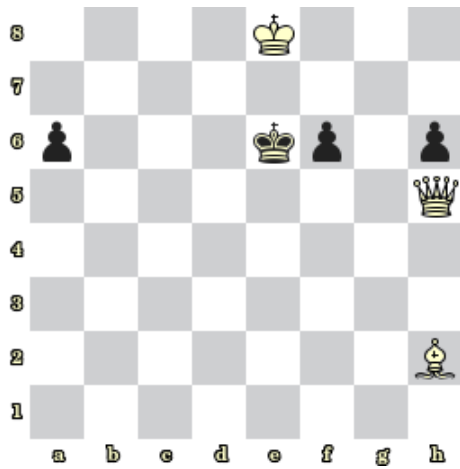


7) Bílý na tahu vyhraje (1161)

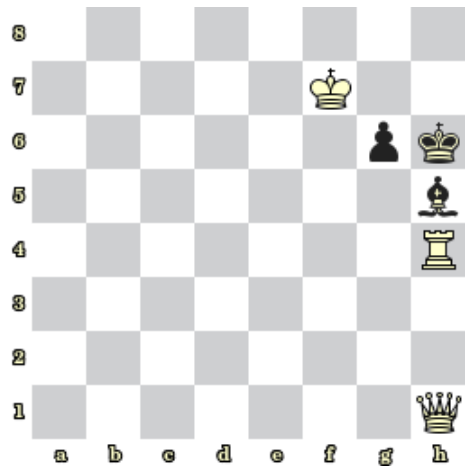


8) Bílý na tahu vyhraje (1163)

### Bonusové diagramy



9) BNT dá mat 2. tahem (1164)



10) BNT dá mat 2. tahem (1165)