




Sada diagramů č. 17a - Zadání 16. 2. 2017 / Kontrola 23. 2. 2017




1) Bílý na tahu dá mat 1. tahem (1166)




2) Bílý na tahu dá mat 1. tahem (1167)



3) Bílý na tahu dá mat 1. tahem (1168)



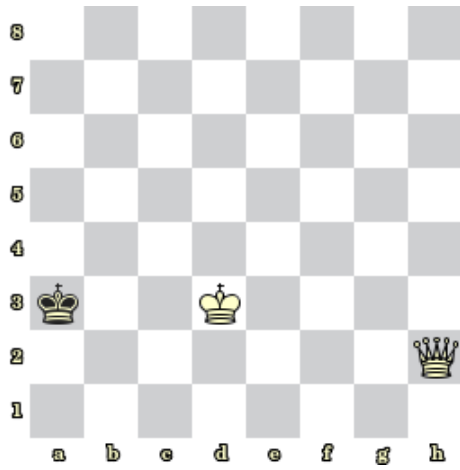
4) Bílý na tahu dá mat 1. tahem (1169)



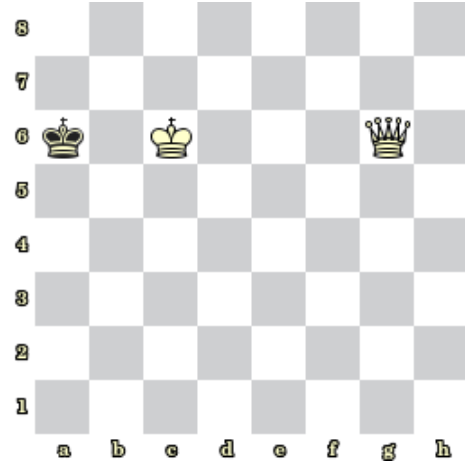
5) Bílý na tahu dá mat 1. tahem (1170)



6) Bílý na tahu dá mat 1. tahem (1171)




7) Bílý na tahu dá mat 2. tahem (1172)




8) Bílý na tahu dá mat 2. tahem (1173)

Bonusové diagramy



9) Bílý na tahu dá mat 2. tahem (1174)



10) Bílý na tahu dá mat 2. tahem (1175)