




Sada diagramů č. 17b – Zadání 16. 2. 2017 / Kontrola 23. 2. 2017




1) Bílý na tahu dá mat 2. tahem (1174)




2) Bílý na tahu dá mat 2. tahem (1175)




3) Černý na tahu dá mat 2. tahem (1176)



4) Bílý na tahu remizuje (1177)




5) Bílý na tahu remizuje (1178)



6) Bílý na tahu vyhraje (1179)



7) Bílý na tahu vyhraje (1180)



8) BNT – Najděte matovou kombinaci (1181)

### Bonusové diagramy



9) BNT – najděte matovou kombinaci (1184)



10) BNT – najděte matovou kombinaci (1185)