



Sada diagramů č. 18c - Zadání 23. 2. 2017 / Kontrola 2. 3. 2017




1) Bílý na tahu vyhraje (1207)



2) BNT – najděte matovou kombinaci (1209)



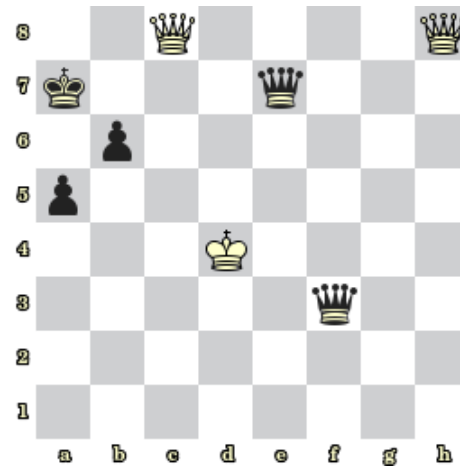
3) BNT – najděte matovou kombinaci (1210)




4) BNT – najděte matovou kombinaci (1211)



5) BNT – Najděte matovou kombinaci (1212)



6) BNT – najděte matovou kombinaci (1213)




7) Bílý na tahu vyhraje (1214)

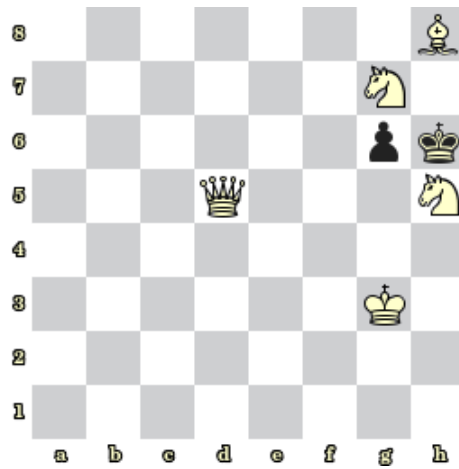


8) Bílý na tahu vyhraje (1215)

Bonusové diagramy



9) BNT – Mat 2. tahem (1216)



10) BNT – Mat 2. tahem (1217)