



Sada diagramů č. 19c - Zadání 9. 3. 2017 / Kontrola 23. 3. 2017




1) Bílý na tahu dá mat 3. tahem (1236)



2) Černý na tahu dá mat 3. tahem (1237)




3) Černý na tahu dá mat 3. tahem (1238)




4) Bílý na tahu dá mat 3. tahem (1239)




5) Bílý na tahu dá mat 3. tahem (1240)



6) Bílý na tahu dá mat 3. tahem (1241)




7) Bílý na tahu dá mat 3. tahem (1242)




8) Bílý na tahu dá mat 3. tahem (1243)

Bonusové diagramy



9) BNT – Mat 2. tahem (1244)



10) BNT – Mat 2. tahem (1245)