



Sada diagramů č. 20a - Zadání 23. 3. 2017 / Kontrola 30. 3. 2017




1) Černý na tahu dá mat 1. tahem (1256)



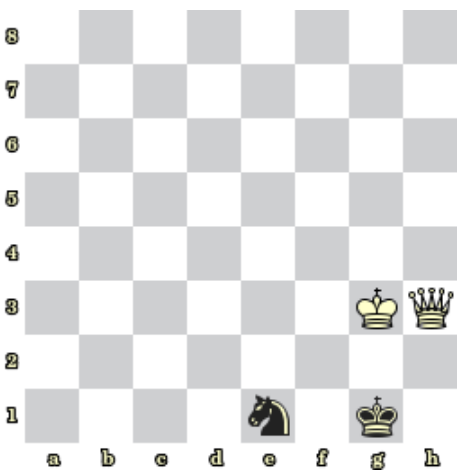
2) Bílý na tahu dá mat 1. tahem (1257)



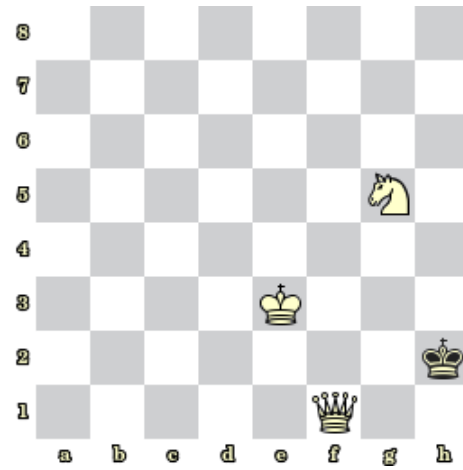
3) Bílý na tahu dá mat 1. tahem (1258)



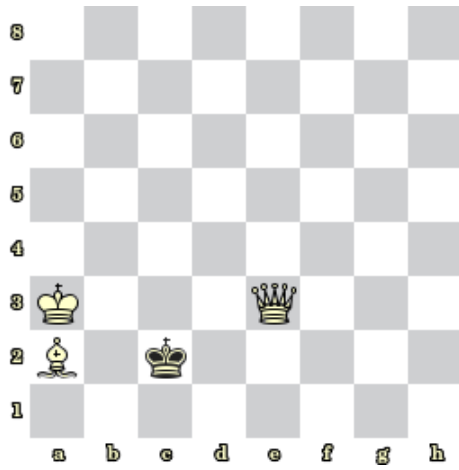
4) Bílý na tahu dá mat 1. tahem (1259)



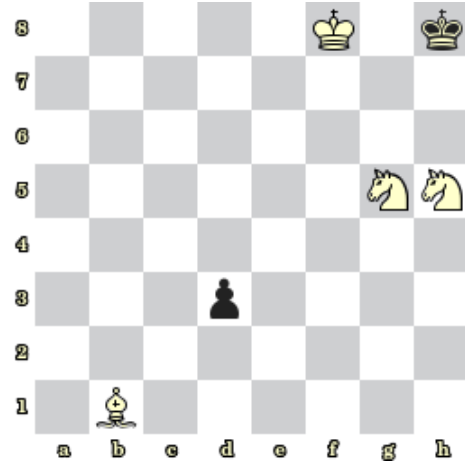
5) Bílý na tahu dá mat 2. tahem (1260)



6) Bílý na tahu dá mat 2. tahem (1261)




7) Bílý na tahu dá mat 2. tahem (1262)




8) Bílý na tahu dá mat 2. tahem (1263)

Bonusové diagramy



9) Bílý na tahu dá mat 2. tahem (1264)



10) Bílý na tahu dá mat 2. tahem (1265)