



Sada diagramů č. 22b - Zadání 20. 4. 2017 / Kontrola 27. 4. 2017




1) Bílý na tahu dá mat 3. tahem (1329)



2) Bílý na tahu dá mat 3. tahem (1330)




3) Černý na tahu dá mat 3. tahem (1331)




4) Bílý na tahu dá mat 4. tahem (1332)



5) Bílý na tahu dá mat 3. tahem (1333)



6) Bílý na tahu dá mat 3. tahem (1334)

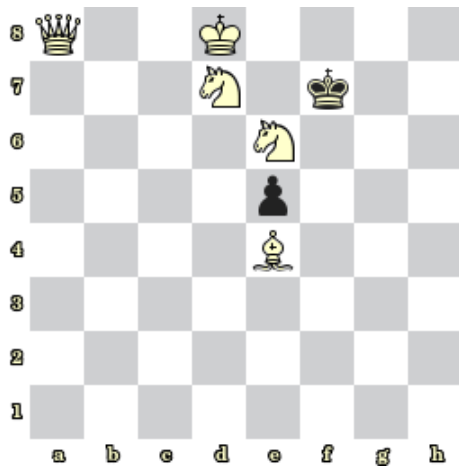


7) Bílý na tahu vyhraje (1335)




8) Bílý na tahu vyhraje (1336)

Bonusové diagramy



9) Bílý na tahu dá mat 2. tahem (1337)



10) Bílý na tahu dá mat 2. tahem (1338)