



Sada diagramů č. 25a - Zadání 11. 5. 2017 / Kontrola 18. 5. 2017




1) Bílý na tahu dá mat 1. tahem (1406)




2) Černý na tahu dá mat 1. tahem (1407)




3) Bílý na tahu dá mat 1. tahem (1408)



4) Bílý na tahu dá mat 2. tahem (1409)




5) Bílý na tahu dá mat 2. tahem (1410)



6) Bílý na tahu dá mat 2. tahem (1411)




7) Bílý na tahu dá mat 2. tahem (1412)




8) Bílý na tahu dá mat 2. tahem (1415)

Bonusové diagramy



9) Bílý na tahu dá mat 3. tahem (1413)



10) Bílý na tahu dá mat 3. tahem (1414)