


Sada diagramů č. 25b - Zadání 11. 5. 2017 / Kontrola 18. 5. 2017




1) Bílý na tahu dá mat 3. tahem (1413)




2) Bílý na tahu dá mat 3. tahem (1414)




3) Bílý na tahu dá mat 3. tahem (1416)




4) Bílý na tahu dá mat 3. tahem (1417)




5) Bílý na tahu dá mat 4. tahem (1418)



6) Bílý na tahu dá mat 6. tahem (1419)




7) Černý na tahu vyhraje (1420)

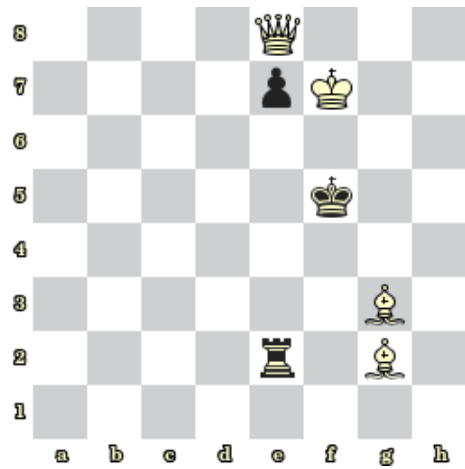


8) Černý na tahu vyhraje (1421)

### Bonusové diagramy



9) Bílý na tahu dá mat 2. tahem (1422)



10) Bílý na tahu dá mat 2. tahem (1423)