




Sada diagramů č. 7a - Zadání 10. 11. 2016 / Kontrola 17. 11. 2016



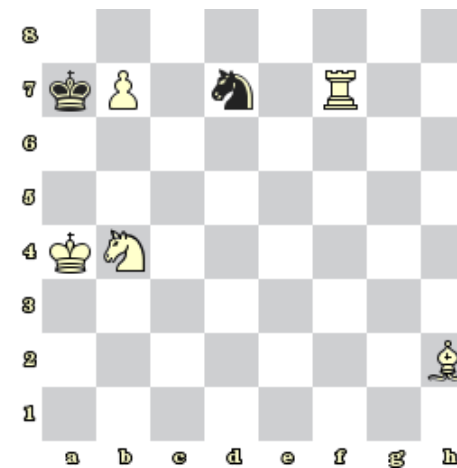
1) Bílý na tahu dá mat 1. tahem (171)



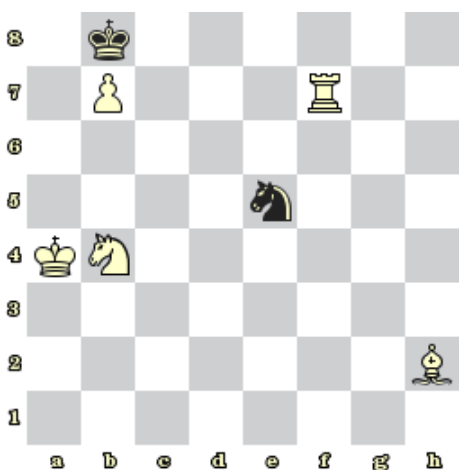
2) Bílý na tahu dá mat 1. tahem (170)



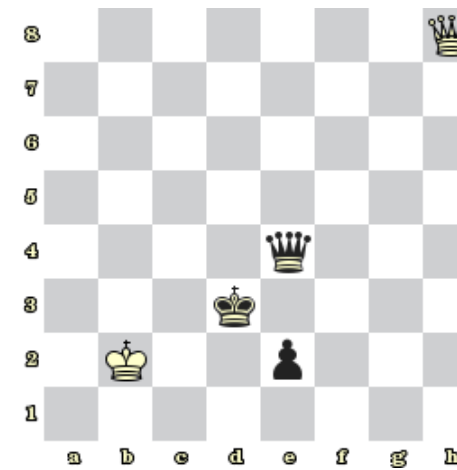
3) Bílý na tahu dá mat 1. tahem (172)



4) Bílý na tahu dá mat 1. tahem (173)



5) Bílý na tahu dá mat 1. tahem (174)



6) Bílý na tahu dá mat 1. tahem (184)




7) Bílý na tahu dá mat 1. tahem (937)



8) Bílý na tahu dá mat 1. tahem (937)

Bonusové diagramy



9) Černý na tahu dá mat 2. tahem (161)



10) Bílý na tahu dá mat 2. tahem (153)