



Sada diagramů č. 7b – Zadání 10. 11. 2016 / Kontrola 17. 11. 2016




1) ČNT – Najděte matovou kombinaci (932)




2) BNT – Najděte matovou kombinaci (934)



3) BNT – Najděte matovou kombinaci (936)




4) BNT – Najděte matovou kombinaci (940)




5) BNT – Najděte matovou kombinaci (942)



6) BNT – Najděte matovou kombinaci (943)



7) ČNT – Najděte matovou kombinaci (947)




8) ČNT – Najděte matovou kombinaci (949)

Bonusové diagramy



9) ČNT – Najděte matovou kombinaci (946)



10) BNT – Najděte matovou kombinaci (951)